

FIITJEE

Solutions to JEE (Main)-2019

JEE–Main–2019 –Jan–10–Second–Shift
PHYSICS, CHEMISTRY & MATHEMATICS

Time Allotted: 3 Hours

Maximum Marks: 360

- Do not open this Test Booklet until you are asked to do so.
- Please read the instructions carefully. You are allotted 5 minutes specifically for this purpose.

Important Instructions:

1. Immediately fill in the particulars on this page of the Test Booklet with *Blue / Black Ball Point Pen*. *Use of pencil is strictly prohibited.*
2. The Answer Sheet is kept inside this Test Booklet. When you are directed to open the Test Booklet, take out the Answer Sheet and fill in the particulars carefully.
3. The test is of **3 hours** duration.
4. The Test Booklet consists of **90** questions. The maximum marks are **360**.
5. There are **three** parts in the question paper A, B, C consisting of **Physics, Chemistry and Mathematics** having 30 questions in each part of equal weightage. Each question is allotted **4 (four)** marks for correct response.
6. *Candidates will be awarded marks as stated above in instruction No.5 for correct response of each question. One mark will be deducted for indicating incorrect response of each question. No deduction from the total score will be made if no response is indicated for an item in the answer sheet.*
7. There is only one correct response for each question. Filling up more than one response in any question will be treated as wrong response and marks for wrong response will be deducted accordingly as per instruction 6 above.
8. Use **Blue / Black Ball Point Pen only** for writing particulars / marking responses on **Side-1** and **Side-2** of the Answer Sheet. **Use of pencil is strictly prohibited.**
9. No candidate is allowed to carry any textual material, printed or written, bits of papers, pager, mobile phone, any electronic device, etc. except the Admit Card inside the examination hall / room.
10. On completion of the test, the candidate must hand over the Answer Sheet to the Invigilator on duty in the Room / Hall. **However, the candidates are allowed to take away this Test Booklet with them.**
11. **Do not fold or make any stray marks on the Answer Sheet.**

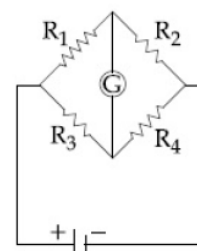
Name of the Candidate (in Capital Letters) : _____

Roll Number : _____

Candidate's Signature: _____

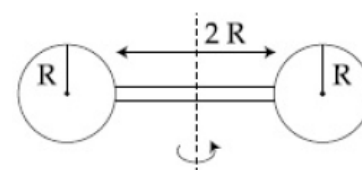
PART –A (PHYSICS)

1. The Wheatstone bridge shown in Fig. here, gets balanced when the carbon resistor used as R_1 has the colour code (Orange, Red, Brown). The resistors R_2 and R_4 are $80\ \Omega$ and $40\ \Omega$, respectively. Assuming that the colour code for the carbon resistors gives their accurate values, the colour code for the carbon resistor, used as R_3 would be:
- (A) Brown, Blue, Brown (B) Brown, Blue, Black
(C) Red, Green, Brown (D) Grey, Black, Brown



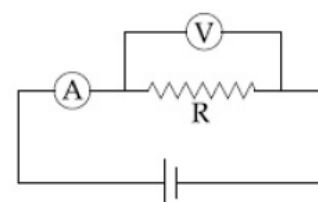
2. Consider the nuclear fission $\text{Ne}^{20} \rightarrow 2\text{He}^4 + \text{C}^{12}$. Given that the binding energy / nucleon of Ne^{20} , He^4 and C^{12} are, respectively, 8.03 MeV, 7.07 MeV, and 7.86 MeV, identify the correct statement:
- (A) energy of 12.4 MeV will be supplied (B) 8.3 MeV energy will be released
(C) energy of 3.6 MeV will be released (D) energy of 11.9 MeV has to be supplied
3. A hoop and a solid cylinder of same mass and radius are made of a permanent magnetic material with their magnetic moment parallel to their respective axes. But the magnetic moment of hoop is twice of solid cylinder. They are placed in a uniform magnetic field in such a manner that their magnetic moments make a small angle with the field. If the oscillation periods of hoop and cylinder are T_h and T_c respectively, then :
- (A) $T_h = T_c$ (B) $T_h = 2T_c$
(C) $T_h = 1.5T_c$ (D) $T_h = 0.5T_c$
4. An unknown metal of mass 192 g heated to a temperature of 100°C was immersed into a brass calorimeter of mass 128 g containing 240 g of water at a temperature of 8.4°C . Calculate the specific heat of the unknown metal if water temperature stabilizes at 21.5°C . (Specific heat of brass is $394\ \text{J kg}^{-1}\ \text{K}^{-1}$)
- (A) $458\ \text{J kg}^{-1}\ \text{K}^{-1}$ (B) $1232\ \text{J kg}^{-1}\ \text{K}^{-1}$
(C) $916\ \text{J kg}^{-1}\ \text{K}^{-1}$ (D) $654\ \text{J kg}^{-1}\ \text{K}^{-1}$

5. Two identical spherical balls of mass M and radius R each are stuck on two ends of a rod of length $2R$ and mass M (see figure). The moment of inertia of the system about the axis passing perpendicularly through the centre of the rod is :

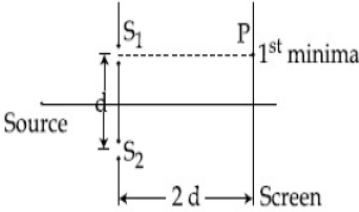


- (A) $\frac{137}{15}MR^2$ (B) $\frac{17}{15}MR^2$
(C) $\frac{209}{15}MR^2$ (D) $\frac{152}{15}MR^2$
6. The self produced emf of a coil is 25 volts. When the current in it is changed at uniform rate from 10 A to 25 A in 1 s, the change in the energy of the inductance is :
- (A) 740 J (B) 437.5 J
(C) 540 J (D) 637.5 J

7. The actual value of resistance R , shown in the figure is $30\ \Omega$. This is measured in an experiment as shown using the standard formula $R = \frac{V}{I}$, where V and I are the readings of the voltmeter and ammeter, respectively. If the measured value of R is 5% less, then the internal resistance of the voltmeter is :



- (A) $600\ \Omega$ (B) $570\ \Omega$
(C) $35\ \Omega$ (D) $350\ \Omega$

8. At some location on earth the horizontal component of earth's magnetic field is 18×10^{-6} T. At this location, magnetic needle of length 0.12 m and pole strength 1.8 A m is suspended from its mid-point using a thread, it makes 45° angle with horizontal in equilibrium. To keep this needle horizontal, the vertical force that should be applied at one of its ends is :
 (A) 3.6×10^{-5} N (B) 1.8×10^{-5} N
 (C) 1.3×10^{-5} N (D) 6.5×10^{-5} N
9. Two vectors \vec{A} and \vec{B} have equal magnitudes. The magnitude of $(\vec{A} + \vec{B})$ is 'n' times the magnitude of $(\vec{A} - \vec{B})$. The angle between \vec{A} and \vec{B} is:
 (A) $\cos^{-1} \left[\frac{n^2 - 1}{n^2 + 1} \right]$ (B) $\cos^{-1} \left[\frac{n - 1}{n + 1} \right]$
 (C) $\sin^{-1} \left[\frac{n^2 - 1}{n^2 + 1} \right]$ (D) $\sin^{-1} \left[\frac{n - 1}{n + 1} \right]$
10. A metal plate of area 1×10^{-4} m² is illuminated by a radiation of intensity 16 mW/m². The work function of the metal is 5eV. The energy of the incident photons is 10 eV and only 10% of it produces photo electrons. The number of emitted photo electrons per second and their maximum energy, respectively, will be : [1 eV = 1.6×10^{-19} J]
 (A) 10^{14} and 10 eV (B) 10^{12} and 5 eV
 (C) 10^{11} and 5 eV (D) 10^{10} and 5 eV
11. A particle which is experiencing a force, given by $\vec{F} = 3\vec{i} - 12\vec{j}$, undergoes a displacement of $\vec{d} = 4\vec{i}$. If the particle had a kinetic energy of 3 J at the beginning of the displacement, what is its kinetic energy at the end of the displacement?
 (A) 9 J (B) 12 J
 (C) 10 J (D) 15 J
12. Consider a Young's double slit experiment as shown in figure. What should be the slit separation d in terms of wavelength λ such that the first minima occurs directly in front of the slit (S_1)?
 (A) $\frac{\lambda}{2(\sqrt{5} - 2)}$ (B) $\frac{\lambda}{(\sqrt{5} - 2)}$
 (C) $\frac{\lambda}{2(5 - \sqrt{2})}$ (D) $\frac{\lambda}{(5 - \sqrt{2})}$
- 
13. The eye can be regarded as a single refracting surface. The radius of curvature of this surface is equal to that of cornea (7.8 mm). This surface separates two media of refractive indices 1 and 1.34. Calculate the distance from the refracting surface at which a parallel beam of light will come to focus.
 (A) 1 cm (B) 2 cm
 (C) 4.0 cm (D) 3.1 cm
14. A current of 2 mA was passed through an unknown resistor which dissipated a power of 4.4 W. Dissipated power when an ideal power supply of 11 V is connected across it is :
 (A) 11×10^{-5} W (B) 11×10^{-3} W
 (C) 11×10^{-4} W (D) 11×10^5 W
15. The diameter and height of a cylinder are measured by a meter scale to be 12.6 ± 0.1 cm and 34.2 ± 0.1 cm, respectively. What will be the value of its volume in appropriate significant figures?
 (A) 4264 ± 81 cm³ (B) 4264 ± 81.0 cm³
 (C) 4260 ± 80 cm³ (D) 4300 ± 80 cm³

16. For equal point charges Q each are placed in the xy plane at $(0, 2)$, $(4, 2)$, $(4, -2)$ and $(0, -2)$. The work required to put a fifth charge Q at the origin of the coordinate system will be :

(A) $\frac{Q^2}{4\pi\epsilon_0} \left(1 + \frac{1}{\sqrt{3}}\right)$ (B) $\frac{Q^2}{4\pi\epsilon_0} \left(1 + \frac{1}{\sqrt{3}}\right)$
 (C) $\frac{Q^2}{2\sqrt{2}\pi\epsilon_0}$ (D) $\frac{Q^2}{4\pi\epsilon_0}$

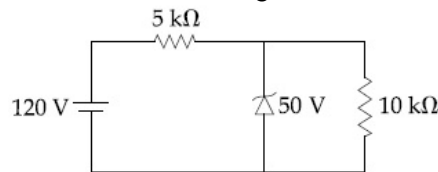
17. The modulation frequency of an AM radio station is 250 kHz, which is 10% of the carrier wave. If another AM station approaches you for license what broadcast frequency will you allot?

(A) 2750 kHz (B) 2900 kHz
 (C) 2250 kHz (D) 2000 kHz

18. A closed organ pipe has a fundamental frequency of 1.5 kHz. The number of overtones that can be distinctly heard by a person with this organ pipe will be : (Assume that the highest frequency a person can hear is 20,000 Hz)

(A) 6 (B) 4
 (C) 7 (D) 5

19. For the circuit shown below, the current through the Zener diode is :



(A) 9 mA (B) 5 mA
 (C) Zero (D) 14 mA

20. The electric field of a plane polarized electromagnetic wave in free space at time $t = 0$ is given by an expression

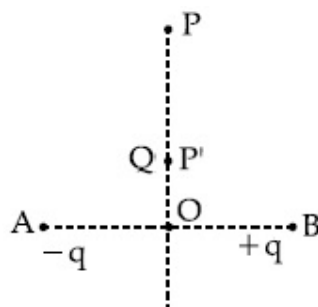
$$\vec{E}(x, y) = 10 \hat{j} \cos[(6x + 8z)]$$

The magnetic field $\vec{B}(x, z, t)$ is given by : (c is the velocity of light)

(A) $\frac{1}{c} (6\hat{k} + 8\hat{i}) \cos[(6x - 8z + 10ct)]$ (B) $\frac{1}{c} (6\hat{k} - 8\hat{i}) \cos[(6x + 8z - 10ct)]$
 (C) $\frac{1}{c} (6\hat{k} + 8\hat{i}) \cos[(6x + 8z - 10ct)]$ (D) $\frac{1}{c} (6\hat{k} - 8\hat{i}) \cos[(6x + 8z + 10ct)]$

21. Charges $-q$ and $+q$ located at A and B, respectively, constitute an electric dipole. Distance $AB = 2a$, O is the mid point of the dipole and OP is perpendicular to AB. A charge Q is placed at P where $OP = y$ and $y \gg 2a$. The charge Q experiences an electrostatic force F. If Q is now moved along the equatorial line to P' such that $OP' = \left(\frac{y}{3}\right)$, the force on Q will be close

to: $\left(\frac{y}{3} \gg 2a\right)$



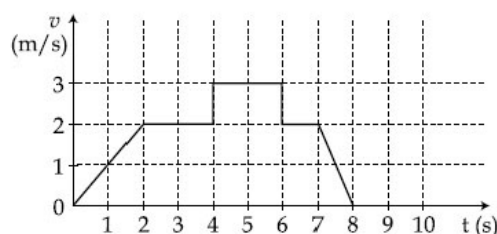
- (A) $3F$ (B) $\frac{F}{3}$
 (C) $9F$ (D) $27F$

22. Two stars of masses 3×10^{31} kg each, and at distance 2×10^{11} m rotate in a plane about their common centre of mass O. A meteorite passes through O moving perpendicular to the star's rotation plane. In order to escape from the gravitational field of this double star, the minimum speed that meteorite should have at O is : (Take Gravitational constant $G = 6.67 \times 10^{-11}$ Nm² kg⁻²)
 (A) 2.4×10^4 m/s (B) 1.4×10^5 m/s
 (C) 3.8×10^4 m/s (D) 2.8×10^5 m/s

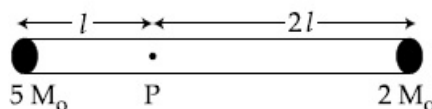
23. Half mole of an ideal monoatomic gas is heated at constant pressure of 1 atm from 20°C to 90°C. Work done by gas is close to: (Gas constant $R = 8.31$ J/mol·K)
 (A) 581 J (B) 291 J
 (C) 146 J (D) 73 J

24. A parallel plate capacitor having capacitance 12 pF is charged by a battery to a potential difference of 10 V between its plates. The charging battery is now disconnected and a porcelain slab of dielectric constant 6.5 is slipped between the plates. The work done by the capacitor on the slab is :
 (A) 692 pJ (B) 508 pJ
 (C) 560 pJ (D) 600 pJ

25. A particle starts from the origin at time $t = 0$ and moves along the positive x-axis. The graph of velocity with respect to time is shown in figure. What is the position of the particle at time $t = 5$ s?
 (A) 10 m (B) 6 m
 (C) 3 m (D) 9 m



26. A rigid massless rod of length $3l$ has two masses attached at each end as shown in the figure. The rod is pivoted at point P on the horizontal axis (see figure). When released from initial horizontal position, its instantaneous angular acceleration will be :



- (A) $\frac{g}{13l}$ (B) $\frac{g}{3l}$
 (C) $\frac{g}{2l}$ (D) $\frac{7g}{3l}$
27. Two forces P and Q, of magnitude $2F$ and $3F$, respectively, are at an angle θ with each other. If the force Q is doubled, then their resultant also gets doubled. Then, the angle θ is :
 (A) 120° (B) 60°
 (C) 90° (D) 30°
28. A cylindrical plastic bottle of negligible mass of filled with 310 ml of water and left floating in a pond with still water. If pressed downward slightly and released, it starts performing simple harmonic motion at angular frequency ω . If the radius of the bottle is 2.5 cm then ω is close to: (density of water = 10^3 kg/m³)
 (A) 3.75 rad s⁻¹ (B) 1.25 rad s⁻¹
 (C) 2.50 rad s⁻¹ (D) 5.00 rad s⁻¹

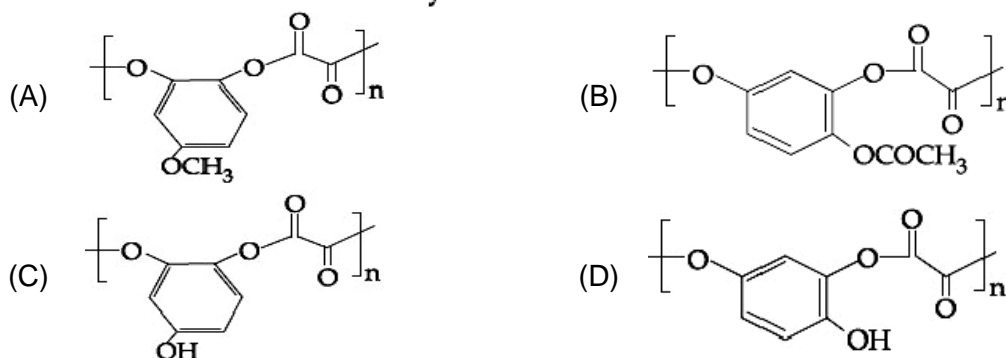
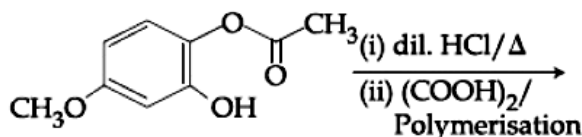
29. A particle executes simple harmonic motion with an amplitude of 5 cm. When the particle is at 4 cm from the mean position, the magnitude of its velocity in SI units is equal to that of its acceleration. Then, its periodic time in seconds is :
- (A) $\frac{4\pi}{3}$ (B) $\frac{3}{8}\pi$
(C) $\frac{8\pi}{3}$ (D) $\frac{7}{3}\pi$
30. Two kg of a monoatomic gas is at a pressure of 4×10^4 N/m². The density of the gas is 8 kg/m³. What is the order of energy of the gas due to its thermal motion?
- (A) 10^3 J (B) 10^5 J
(C) 10^4 J (D) 10^6 J

PART –B (CHEMISTRY)

31. The ground state energy of hydrogen atom is -13.6 eV. The energy of second excited state of He^+ ion in eV is:
 (A) -54.4 (B) -3.4
 (C) -6.04 (D) -27.2

32. Haemoglobin and gold sol are examples of:
 (A) positively and negatively charged sols, respectively
 (B) positively charged sols
 (C) negatively charged sols
 (D) negatively and positively charged sols, respectively

33. The major product of the following reaction is:



34. The amount of sugar ($\text{C}_{12}\text{H}_{22}\text{O}_{11}$) required to prepare 2 L of its 0.1 M aqueous solution is :
 (A) 136.8 g (B) 17.1 g
 (C) 68.4 g (D) 34.2 g
35. Among the following reactions of hydrogen with halogens, the one that requires a catalyst is:
 (A) $\text{H}_2 + \text{I}_2 \rightarrow 2\text{HI}$ (B) $\text{H}_2 + \text{Cl}_2 \rightarrow 2\text{HCl}$
 (C) $\text{H}_2 + \text{Br}_2 \rightarrow 2\text{HBr}$ (D) $\text{H}_2 + \text{F}_2 \rightarrow 2\text{HF}$
36. 5.1 g NH_4SH is introduced in 3.0 L evacuated flask at 327°C . 30% of the solid NH_4SH decomposed to NH_3 and H_2S as gases. The K_p of the reaction at 327°C is ($R = 0.082$ L atm $\text{mol}^{-1} \text{K}^{-1}$, Molar mass of S = 32 g mol^{-1} , molar mass of N = 14 g mol^{-1})
 (A) $0.242 \times 10^{-4} \text{ atm}^2$ (B) $1 \times 10^{-4} \text{ atm}^2$
 (C) $4.9 \times 10^{-3} \text{ atm}^2$ (D) 0.242 atm^2
37. The reaction that is NOT involved in the ozone layer depletion mechanism in the stratosphere is :
 (A) $\text{CF}_2\text{Cl}_2(\text{g}) \xrightarrow{uv} \dot{\text{C}}\text{F}_2\text{Cl}(\text{g}) + \dot{\text{C}}\text{FCl}_2(\text{g})$ (B) $\text{ClO}(\text{g}) + \text{O}(\text{g}) \rightarrow \dot{\text{C}}\text{l}(\text{g}) + \text{O}_2(\text{g})$
 (C) $\text{CH}_4 + 2\text{O}_3 \rightarrow 3\text{CH}_2 = \text{O} + 3\text{H}_2\text{O}$ (D) $\text{HOCl}(\text{g}) \xrightarrow{hv} \dot{\text{O}}\text{H}(\text{g}) + \dot{\text{C}}\text{l}(\text{g})$
38. In the cell $\text{Pt}(\text{s})|\text{H}_2(\text{g}, 1\text{bar})|\text{HCl}(\text{aq})|\text{AgCl}(\text{s})|\text{Ag}(\text{s})|\text{Pt}(\text{s})$ the cell potential is 0.92 V when a 10^{-6} molal HCl solution is used. The standard electrode potential of $(\text{AgCl} / \text{Ag}, \text{Cl}^-)$ electrode is :

$$\left\{ \text{Given, } \frac{2.303RT}{F} = 0.06\text{V at } 298\text{K} \right\}$$

- (A) 0.94 V (B) 0.76 V
(C) 0.40 V (D) 0.20 V

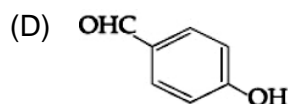
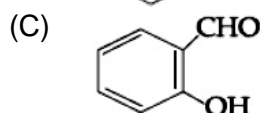
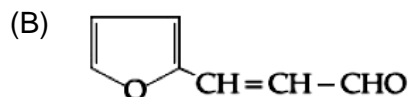
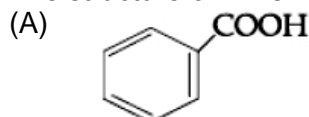
39. The 71st electron of an element X with an atomic number of 71 enters into the orbital:
(A) 6p (B) 4f
(C) 5d (D) 6s

40. The correct match between item 'I' and item 'II' is:

Item 'I' (compound)		Item 'II' (reagent)	
(a)	Lysine	(p)	1-naphtol
(b)	Furfural	(q)	Ninhydrin
(c)	Benzyl alcohol	(r)	KMnO ₄
(d)	Styrene	(s)	Ceric ammonium nitrate

- (A) (a)→(q); (b) →(p); (c) →(s); (d) →(r) (B) (a)→(q); (b) →(p); (c) →(r); (d) →(s)
(C) (a)→(r); (b) →(p); (c) →(q); (d) →(s) (D) (a)→(q); (b) →(r); (c) →(s); (d) →(p)

41. An aromatic compound 'A' having molecular formula C₇H₆O₂ on treating with aqueous ammonia and heating forms compound 'B'. The compound 'B' on reaction with molecular bromine and potassium hydroxide provides compound 'C' having molecular formula C₆H₇N. The structure of 'A' is :



42. The process with negative entropy change is:
(A) Dissociation of CaSO₄(s) to CaO(s) and SO₃(g)
(B) Sublimation of dry ice
(C) Dissolution of iodine in water
(D) Synthesis of ammonia from N₂ and H₂

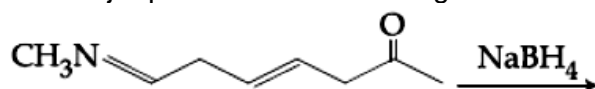
43. An ideal gas undergoes isothermal compression from 5 m³ to 1 m³ against a constant external pressure of 4 NM⁻². Heat released in this process is used to increase the temperature of 1 mole of Al. If molar heat capacity of Al is 24 J mol⁻¹K⁻¹, the temperature of Al is increases by:

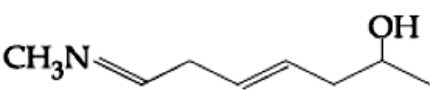
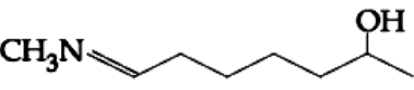
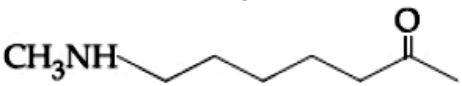
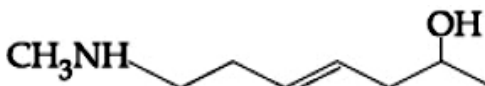
- (A) $\frac{3}{2}$ K (B) 2 K
(C) $\frac{2}{3}$ K (D) 1 K

44. Elevation in the boiling point for 1 molal solution of glucose is 2 K. The depression in the freezing point for 2 molal solution of glucose in the same solvent is 2 K. The relation between K_b and K_f is :

- (A) K_b = 1.5K_f (B) K_b = K_f
(C) K_b = 0.5K_f (D) K_b = 2K_f

45. The major product of the following reaction is :



- (A)  (B) 
 (C)  (D) 

46. Sodium metal on dissolution in liquid ammonia gives a deep blue solution due to the formation of:

- (A) sodium-ammonia complex (B) sodamide
 (C) sodium ion-ammonia complex (D) ammoniated electrons

47. For an elementary chemical reaction, $A_2 \xrightleftharpoons[k_{-1}]{k_1} 2A$, the expression for $\frac{d[A]}{dt}$ is

- (A) $k_1[A_2] - k_{-1}[A]^2$ (B) $2k_1[A_2] - k_{-1}[A]^2$
 (C) $k_1[A_2] + k_{-1}[A]^2$ (D) $2k_1[A_2] - 2k_{-1}[A]^2$

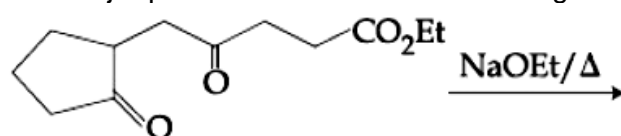
48. Which of the following tests cannot be used for identifying amino acids?

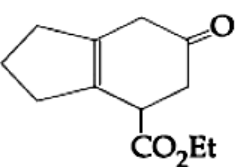
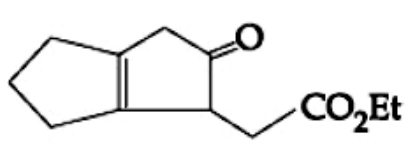
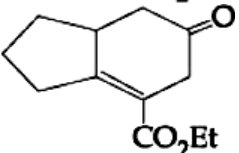
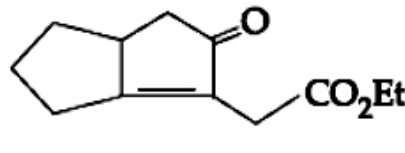
- (A) Biuret test (B) Barfoed test
 (C) Ninhydrin test (D) Xanthoproteic test

49. The difference in the number of unpaired electrons of a metal ion in its high-spin and low-spin octahedral complexes is two. The metal ion is :

- (A) Ni^{2+} (B) Fe^{2+}
 (C) Co^{2+} (D) Mn^{2+}

50. The major product obtained in the following reaction is:

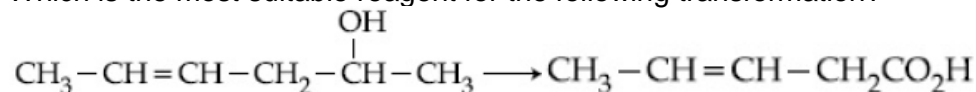


- (A)  (B) 
 (C)  (D) 

51. The pair that contains two P – H bonds in each of the oxoacids is :

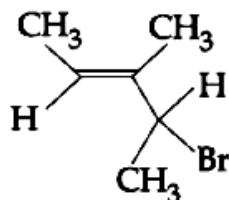
- (A) $\text{H}_4\text{P}_2\text{O}_5$ and $\text{H}_4\text{P}_2\text{O}_6$ (B) H_3PO_2 and $\text{H}_4\text{P}_2\text{O}_5$
 (C) H_3PO_3 and H_3PO_2 (D) $\text{H}_4\text{P}_2\text{O}_5$ and H_3PO_3

52. Which is the most suitable reagent for the following transformation?



- (A) Tollen's reagent (B) I_2 / NaOH
 (C) $\text{CrO}_2\text{Cl}_2 / \text{Cs}_2$ (D) alkaline KMnO_4

53. What is the IUPAC name of the following compound?



- (A) 3-Bromo-1, 2-dimethylbut-1-ene (B) 3-Bromo-3-methyl-1, 2-dimethylprop-1-ene
(C) 2-Bromo-3-methylpent-3-ene (D) 4-Bromo-3-methylpent-2-ene

54. The number of 2-centre-2-electron and 3-centre-2-electron bonds in B_2H_6 , respectively, are :
(A) 2 and 1 (B) 4 and 2
(C) 2 and 2 (D) 2 and 4

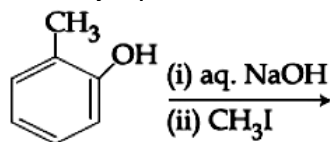
55. In the reaction of oxalate with permanganate in acidic medium, the number of electrons involved in producing one molecule of CO_2 is :
(A) 1 (B) 10
(C) 2 (D) 5

56. A reaction of cobalt(III) chloride and ethylenediamine in a 1 : 2 mole ratio generates two isomeric products A (violet coloured) and B (green coloured). A can show optical activity, but, B is optically inactive. What type of isomers does A and B represent?
(A) Geometrical isomers (B) Coordination isomers
(C) Linkage isomers (D) Ionisation isomers

57. The electrolytes usually used in the electroplating of gold and silver, respectively, are :
(A) $[Au(CN)_2]^-$ and $[Ag(CN)_2]^-$ (B) $[Au(CN)_2]^-$ and $[AgCl_2]^-$
(C) $[Au(OH)_4]^-$ and $[Ag(OH)_2]^-$ (D) $[Au(NH_3)_2]^+$ and $[Ag(CN)_2]^-$

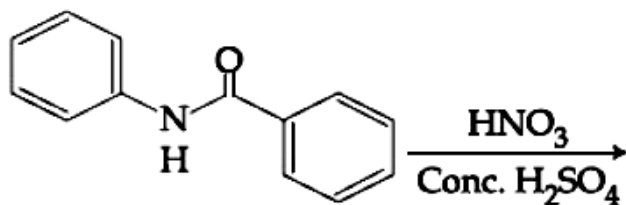
58. A compound of formula A_2B_3 has the hcp lattice. Which atom forms the hcp lattice and what fraction of tetrahedral voids is occupied by the other atoms :
(A) hcp lattice - A, $\frac{2}{3}$ Tetrahedral voids - B (B) hcp lattice - A, $\frac{1}{3}$ Tetrahedral voids - B
(C) hcp lattice - B, $\frac{2}{3}$ Tetrahedral voids - A (D) hcp lattice - B, $\frac{1}{3}$ Tetrahedral voids - A

59. The major product of the following reaction is :

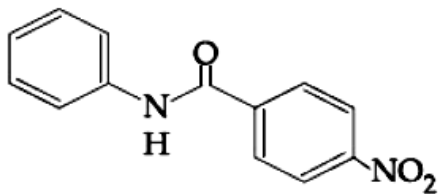


- (A) (B)
(C) (D)

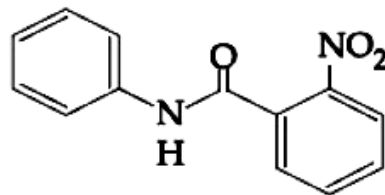
60. What will be the major product in the following mononitration reaction?



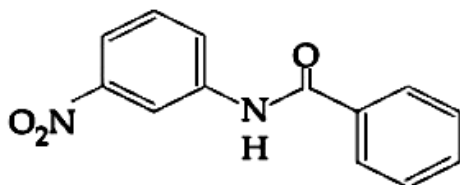
(A)



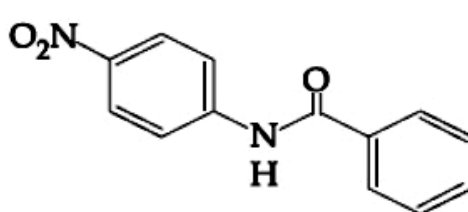
(B)



(C)



(D)



PART-C (MATHEMATICS)

61. The value of λ such that sum of the squares of the roots of quadratic equation, $x^2 + (3 - \lambda)x + 2 = \lambda$ has the least value is :
- (A) $\frac{15}{8}$ (B) 1
(C) $\frac{4}{9}$ (D) 2
62. The value of $\cos \frac{\pi}{2^2} \cdot \cos \frac{\pi}{2^3} \cdot \dots \cdot \cos \frac{\pi}{2^{10}} \cdot \sin \frac{\pi}{2^{10}}$ is :
- (A) $\frac{1}{512}$ (B) $\frac{1}{1024}$
(C) $\frac{1}{256}$ (D) $\frac{1}{2}$
63. The curve amongst the family of curves represented by the differential equation, $(x^2 - y^2)dx + 2xy dy = 0$ which passes through (1, 1), is :
- (A) a circle with centre on the x-axis
(B) an ellipse with major axis along the y-axis
(C) a circle with centre on the y-axis
(D) a hyperbola with transverse axis along the x-axis
64. Let $f : (-1, 1) \rightarrow \mathbb{R}$ be a function defined by $f(x) = \max\{-|x|, -\sqrt{1-x^2}\}$. If K be the set of all points at which f is not differentiable, then K has exactly :
- (A) five elements (B) one element
(C) three elements (D) two elements
65. The positive value of λ for which the co-efficient of x^2 in the expression $x^2 \left(\sqrt{x} + \frac{\lambda}{x^2} \right)^{10}$ is 720, is :
- (A) 4 (B) $2\sqrt{2}$
(C) $\sqrt{5}$ (D) 3
66. The tangent to the curve, $y = xe^{x^2}$ passing, through the point (1, e) also passes through the point :
- (A) (2, 3e) (B) $\left(\frac{4}{3}, 2e \right)$
(C) $\left(\frac{5}{3}, 2e \right)$ (D) (3, 6e)
67. Let N be the set of natural numbers and two functions f and g be defined as $f, g : \mathbb{N} \rightarrow \mathbb{N}$ such that
- $$f(n) = \begin{cases} \frac{n+1}{2} & \text{if } n \text{ is odd} \\ \frac{n}{2} & \text{if } n \text{ is even} \end{cases}$$
- and $g(n) = n - (-1)^n$. Then $f \circ g$ is :
- (A) onto but not one-one. (B) one-one but not onto.
(C) both one-one and onto. (D) neither one-one nor onto.

68. The number of values of $\theta \in (0, \pi)$ for which the system of linear equations
 $x + 3y + 7z = 0$
 $-x + 4y + 7z = 0$
 $(\sin 3\theta)x + (\cos 2\theta)y + 2z = 0$ has a non-trivial solution, is :
 (A) three (B) two
 (C) four (D) one
69. Let $\vec{\alpha} = (\lambda - 2)\vec{a} + \vec{b}$ and $\vec{\beta} = (4\lambda - 2)\vec{a} + 3\vec{b}$ be two given vectors where \vec{a} and \vec{b} are non collinear. The value of λ for which vectors $\vec{\alpha}$ and $\vec{\beta}$ are collinear, is :
 (A) -4 (B) -3
 (C) 4 (D) 3
70. Two sides of a parallelogram are along the lines, $x + y = 3$ and $x - y + 3 = 0$. If its diagonals intersect at $(2, 4)$, then one of its vertex is :
 (A) $(3, 5)$ (B) $(2, 1)$
 (C) $(2, 6)$ (D) $(3, 6)$
71. If $\int_0^x f(t) dt = x^2 + \int_x^1 t^2 f(t) dt$, then $f\left(\frac{1}{2}\right)$ is :
 (A) $\frac{24}{25}$ (B) $\frac{18}{25}$
 (C) $\frac{4}{5}$ (D) $\frac{6}{25}$
72. Let $z = \left(\frac{\sqrt{3}}{2} + \frac{i}{2}\right)^5 + \left(\frac{\sqrt{3}}{2} - \frac{i}{2}\right)^5$. If $R(z)$ and $I(z)$ respectively denote the real and imaginary parts of z , then :
 (A) $I(z) = 0$ (B) $R(z) > 0$ and $I(z) > 0$
 (C) $R(z) < 0$ and $I(z) > 0$ (D) $R(z) = -3$
73. If the probability of hitting a target by a shooter, in any shot, is $\frac{1}{3}$, then the minimum number of independent shots at the target required by him so that the probability of hitting the target at least once is greater than $\frac{5}{6}$, is :
 (A) 3 (B) 6
 (C) 5 (D) 4
74. If $\int x^5 e^{-4x^3} dx = \frac{1}{48} e^{-4x^3} f(x) + C$, where C is a constant of integration, then $f(x)$ is equal to :
 (A) $-2x^3 - 1$ (B) $-4x^3 - 1$
 (C) $-2x^3 + 1$ (D) $4x^3 + 1$
75. If the area of an equilateral triangle inscribed in the circle, $x^2 + y^2 + 10x + 12y + c = 0$ is $27\sqrt{3}$ sq. units then c is equal to :
 (A) 13 (B) 20
 (C) -25 (D) 25
76. Consider the following three statements :
 P : 5 is a prime number.
 Q : 7 is a factor of 192.
 R : L.C.M. of 5 and 7 is 35.

Then the truth value of which one of the following statements is true?

- (A) $(\sim P) \vee (Q \wedge R)$ (B) $(P \wedge Q) \vee (\sim R)$
 (C) $(\sim P) \wedge (\sim Q \wedge R)$ (D) $P \vee (\sim Q \wedge R)$

77. The length of the chord of the parabola $x^2 = 4y$ having equation $x - \sqrt{2}y + 4\sqrt{2} = 0$ is :

- (A) $3\sqrt{2}$ (B) $2\sqrt{11}$
 (C) $8\sqrt{2}$ (D) $6\sqrt{3}$

78. Let $A = \begin{bmatrix} 2 & b & 1 \\ b & b^2 + 1 & b \\ 1 & b & 2 \end{bmatrix}$ where $b > 0$. Then the minimum value of $\frac{\det(A)}{b}$ is :

- (A) $2\sqrt{3}$ (B) $-2\sqrt{3}$
 (C) $-\sqrt{3}$ (D) $\sqrt{3}$

79. Let $S = \left\{ (x, y) \in \mathbb{R}^2 : \frac{y^2}{1+r} - \frac{x^2}{1-r} = 1 \right\}$, where $r \neq \pm 1$. Then S represents :

- (A) a hyperbola whose eccentricity is $\frac{2}{\sqrt{1-r}}$, when $0 < r < 1$.
 (B) an ellipse whose eccentricity is $\sqrt{\frac{2}{r+1}}$, when $r > 1$.
 (C) a hyperbola whose eccentricity is $\frac{2}{\sqrt{r+1}}$, when $0 < r < 1$.
 (D) an ellipse whose eccentricity is $\frac{1}{\sqrt{r+1}}$, when $r > 1$.

80. if $\sum_{r=0}^{25} \left\{ {}^{50}C_r \cdot {}^{50-r}C_{25-r} \right\} = K \left({}^{50}C_{25} \right)$, then K is equal to :

- (A) $(25)^2$ (B) $2^{25} - 1$
 (C) 2^{24} (D) 2^{25}

81. The plane which bisects the line segment joining the points $(-3, -3, 4)$ and $(3, 7, 6)$ at right angles, passes through which one of the following points?

- (A) $(-2, 3, 5)$ (B) $(4, -1, 7)$
 (C) $(2, 1, 3)$ (D) $(4, 1, -2)$

82. The value of $\cot \left(\sum_{n=1}^{19} \cot^{-1} \left(1 + \sum_{p=1}^n 2p \right) \right)$ is :

- (A) $\frac{21}{19}$ (B) $\frac{19}{21}$
 (C) $\frac{22}{23}$ (D) $\frac{23}{22}$

83. If mean and standard deviation of 5 observations x_1, x_2, x_3, x_4, x_5 are 10 and 3, respectively, then the variance of 6 observations x_1, x_2, \dots, x_3 and -50 is equal to :

- (A) 509.5 (B) 586.5
 (C) 582.5 (D) 507.5

84. Let f be a differential function such that $f'(x) = 7 - \frac{3f(x)}{4x}$, ($x > 0$) and $f(1) \neq 4$. Then $\lim_{x \rightarrow 0^+} x f\left(\frac{1}{x}\right)$:
- (A) exists and equals $\frac{4}{7}$. (B) exists and equals 4.
 (C) does not exist. (D) exists and equals 0.
85. Two vertices of a triangle are (0, 2) and (4, 3). If its orthocenter is at the origin, then its third vertex lies in which quadrant?
 (A) third (B) second
 (C) first (D) fourth
86. The value of $\int_{-\pi/2}^{\pi/2} \frac{dx}{[x] + [\sin x] + 4}$, where $[t]$ denotes the greatest integer less than or equal to t , is :
- (A) $\frac{1}{12}(7\pi + 5)$ (B) $\frac{1}{12}(7\pi - 5)$
 (C) $\frac{3}{20}(4\pi - 3)$ (D) $\frac{3}{10}(4\pi - 3)$
87. On which of the following lines lies the point of intersection of the line, $\frac{x-4}{2} = \frac{y-5}{2} = \frac{z-3}{1}$ and the plane, $x + y + z = 2$?
- (A) $\frac{x+3}{3} = \frac{4-y}{3} = \frac{z+1}{-2}$ (B) $\frac{x-4}{1} = \frac{y-5}{1} = \frac{z-5}{-1}$
 (C) $\frac{x-1}{1} = \frac{y-3}{2} = \frac{z+4}{-5}$ (D) $\frac{x-2}{2} = \frac{y-3}{2} = \frac{z+3}{3}$
88. Let $a_1, a_2, a_3, \dots, a_{10}$ be in G.P. with $a_i > 0$ for $i = 1, 2, \dots, 10$ and S be the set of pairs $(r, k), r, k \in \mathbb{N}$ (the set of natural numbers) for which
- $$\begin{vmatrix} \log_e a_1^r a_2^k & \log_e a_2^r a_3^k & \log_e a_3^r a_4^k \\ \log_e a_4^r a_5^k & \log_e a_5^r a_6^k & \log_e a_6^r a_7^k \\ \log_e a_7^r a_8^k & \log_e a_8^r a_9^k & \log_e a_9^r a_{10}^k \end{vmatrix} = 0$$
- Then the number of elements in S , is :
- (A) 4 (B) infinitely many
 (C) 2 (D) 10
89. With the usual notation, in $\triangle ABC$, if $\angle A + \angle B = 120^\circ$, $a = \sqrt{3} - 1$, then the ratio $\angle A : \angle B$, is :
- (A) 7 : 1 (B) 5 : 3
 (C) 9 : 7 (D) 3 : 1
90. A helicopter is flying along the curve given by $y - x^{3/2} = 7$, ($x \geq 0$). A soldier positioned at the point $\left(\frac{1}{2}, 7\right)$ wants to shoot down the helicopter when it is nearest to him. Then this nearest distance is :
- (A) $\frac{\sqrt{5}}{6}$ (B) $\frac{1}{3}\sqrt{\frac{7}{3}}$
 (C) $\frac{1}{6}\sqrt{\frac{7}{3}}$ (D) $\frac{1}{2}$

JEE (Mains) – 2019

ANSWERS

PART A – PHYSICS

- | | | |
|-------|-------------------------|-------|
| 1. A | 2. No option is correct | 3. A |
| 4. B | 5. A | 6. A |
| 8. D | 9. A | 10. C |
| 12. A | 13. D | 14. A |
| 16. B | 17. D | 18. A |
| 20. B | 21. D | 22. D |
| 24. B | 25. D | 26. A |
| 28. B | 29. C | 30. C |
| | | 7. B |
| | | 11. D |
| | | 15. B |
| | | 19. A |
| | | 23. B |
| | | 27. A |

PART B – CHEMISTRY

- | | | | |
|-------|-------|-------|-------|
| 31. C | 32. A | 33. C | 34. C |
| 35. A | 36. A | 37. C | 38. D |
| 39. C | 40. A | 41. A | 42. D |
| 43. C | 44. D | 45. D | 46. D |
| 47. D | 48. B | 49. C | 50. C |
| 51. B | 52. B | 53. D | 54. B |
| 55. B | 56. A | 57. A | 58. A |
| 59. B | 60. D | | |

PART C – MATHEMATICS

- | | | | |
|-------|-------|-------|-------|
| 61. D | 62. A | 63. A | 64. C |
| 65. A | 66. B | 67. A | 68. B |
| 69. A | 70. D | 71. A | 72. D |
| 73. C | 74. B | 75. D | 76. D |
| 77. D | 78. A | 79. B | 80. B |
| 81. D | 82. A | 83. D | 84. B |
| 85. B | 86. C | 87. C | 88. B |
| 89. A | 90. C | | |

HINTS AND SOLUTIONS

PART A – PHYSICS

1. $R_1 = 32 \times 10 = 320 \Omega$
 $R_3 = \frac{R_y}{R_2} \times R_1 = \frac{40 \times 320}{80} = 160 \Omega$
 \therefore Colour code of R_3 be Brown, Blue, Brown.

2. $Q = (\text{B.E.})_R - (\text{B.E.})_P$
 $= 20 \times 8.03 - (8 \times 7.07 + 12 \times 7.86)$
 $= 160.6 - (56.56 + 94.32)$
 $\therefore Q = +9.72 \text{ meV}$
 9.72 MeV released.

3. $\therefore T = 2\pi \sqrt{\frac{I}{\mu B}}$
 $\frac{T_h}{T_c} = \sqrt{\frac{I_R \times \mu_c}{I_c \times \mu_h}}$
 $= \sqrt{2 \times \frac{1}{2}} = 1$
 $T_h = T_c$

4. Heat loss = Heat gain
 $192 \times S(100 - 21.5) = (128 \times 0.394 + 240 \times 4.2)(21.5 - 8.4)$
 $192 \times 78.5 \times S = 1058.432 \times 13.1$
 $S = 0.91995 \text{ J/g K}^{-1}$
 $S = 919.95 \text{ J/kg K}^{-1}$

5. $I = 2 \left[\frac{2}{5} MR^2 + M4R^2 \right] + M \frac{4R^2}{12}$
 $= MR^2 \left[\frac{1}{3} + \frac{4}{5} + 8 \right] = \frac{137}{15} MR^2$

6. $\frac{L\Delta T}{\Delta t} = 25$
 $\Rightarrow L = \frac{25 \times 1}{15} = \frac{5}{3}$
 $\Delta U = \frac{1}{2} L (I_f^2 - I_i^2) = \frac{1}{2} \times \frac{5}{3} \times (25^2 - 10^2)$
 $= \frac{5}{6} \times 525 = 4.7.5 \text{ J}$

7. $\frac{30R}{R+30} = 30 \times 0.95$
 $\Rightarrow R = 570 \Omega$

8. $\tau = F \times 0.06 = 1.8 \times 0.012 \times 18 \times 10^{-6}$
 $F = 6.48 \times 10^{-5}$

$$\begin{aligned}
 9. \quad |\vec{A} + \vec{B}| &= n |\vec{A} - \vec{B}| \\
 \Rightarrow A^2 + B^2 + 2AB \cos \theta &= n^2(A^2 + B^2 - 2AB \cos \theta) \\
 \Rightarrow \cos \theta(1+n^2) &= \frac{2a^2(n^2-1)}{2a^2} \quad [A=B=a] \\
 \cos \theta &= \frac{n^2-1}{n^2+1}
 \end{aligned}$$

$$\begin{aligned}
 10. \quad n &= \frac{16 \times 10^{-3} \times 10^{-4}}{10 \times 10 \times 10^{-19}} \approx 1.6 \times 10^{11} \\
 (\text{K.E.})_{\max} &= (10 - 5) \text{ eV} = 5 \text{ eV}
 \end{aligned}$$

$$\begin{aligned}
 11. \quad \text{K.E.} - 3 &= \vec{F} \cdot \vec{d} \\
 \text{K.E.} &= 3 + (3\hat{i} - 12\hat{j}) \times (4\hat{i}) \\
 \text{K.E.} &= 3 + 12 = 15 \text{ J}
 \end{aligned}$$

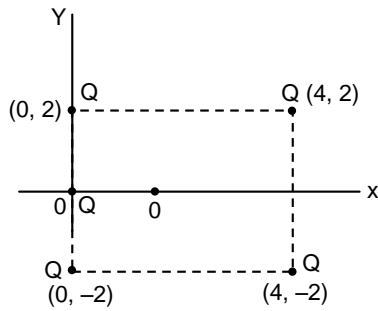
$$\begin{aligned}
 12. \quad \sqrt{(2d)^2 + (d)^2} - 2d &= \frac{\lambda}{2} \\
 \Rightarrow (\sqrt{5} - 2)d &= \frac{\lambda}{2} \\
 \Rightarrow d &= \frac{\lambda}{2(\sqrt{5} - 2)}
 \end{aligned}$$

$$\begin{aligned}
 13. \quad \frac{\mu_2}{v} - \frac{\mu_1}{u} &= \frac{\mu_2 - \mu_1}{R} \\
 \Rightarrow \frac{1.34}{v} - \frac{1}{-\infty} &= \frac{0.34}{7.8} \\
 \Rightarrow v &= \frac{1.34 \times 7.8}{0.34} \text{ nm} = 3.074 \text{ cm}
 \end{aligned}$$

$$\begin{aligned}
 14. \quad R &= \frac{P}{I^2} = \frac{4.4}{4 \times 10^{-6}} \Omega \\
 P' &= \frac{V^2}{R} = \frac{11 \times 11 \times 4 \times 10^{-6}}{4.4} \text{ W} \\
 &= 11 \times 10^{-5} \text{ W}
 \end{aligned}$$

$$\begin{aligned}
 15. \quad v &= \pi R^2 h = \frac{\pi}{4} D^2 h \\
 &= 4260 \text{ cm}^3 \\
 \therefore \frac{\Delta v}{v} &= 2 \frac{\Delta D}{D} + \frac{\Delta h}{h} \\
 &= \left(2 \times \frac{0.1}{12.6} + \frac{0.1}{34.2} \right) v \\
 &= \frac{2 \times 426}{12.6} + \frac{426}{34.2} \\
 &= 67.61 + 12.459 = 80.075 \\
 \therefore v &= 4260 \pm 80 \text{ cm}^3
 \end{aligned}$$

16.



$$W = VQ = \frac{1}{4\pi\epsilon_0} Q^2 \left[\frac{1}{2} + \frac{1}{2} + \frac{2}{2\sqrt{5}} \right]$$

$$\therefore \frac{Q^2}{4\pi\epsilon_0} \left[1 + \frac{1}{\sqrt{5}} \right]$$

17. The interval between two carrier frequencies should be at least two times of AM frequency.

18. $\frac{250 \text{ kHz}}{1.5 \text{ kHz}} = 13.33$

\therefore Possible harmonics
1, 3, 5, 7, 9, 11, 13
i.e 6.

19. $i_{10k} = \frac{50}{10k} = 5 \text{ mA}$
 $i_{5k} = \frac{120 - 50}{5k} = 14 \text{ mA}$
 $i_2 = (14 - 5) \text{ mA} = 9 \text{ mA}$

20. $\vec{E} = 10\hat{j} \cos(6x + 8z - 10ct)$

$$B_o = \frac{E_o}{C} = \frac{10}{C}$$

$$W = 10 C$$

$$\therefore \hat{E} \times \hat{B} = \hat{C}$$

$$\begin{vmatrix} \hat{i} & \hat{j} & \hat{k} \\ 0 & 1 & 0 \\ B_x & B_y & B_z \end{vmatrix} = \frac{6\hat{i} + 8\hat{j}}{10}$$

$$\Rightarrow B_z \hat{i} - 0\hat{j} - B_x \hat{k} = \frac{3}{5} \hat{i} + \frac{4}{5} \hat{j}$$

$$B_z = \frac{3}{5}, B_y = 0, B_x = \frac{4}{5}$$

$$\therefore \vec{B} = \frac{1}{C} (-8\hat{i} + 6\hat{k}) \cos(6x + 8z + 10ct)$$

21. $\therefore F \propto \frac{1}{r^3}$

Required force = 27 F.

22. $\frac{1}{2}mv^2 + \frac{2(-GMm)}{r} = 0$

$$V^2 = \frac{4GM}{r} = \frac{4 \times 6.67 \times 10^{-11} \times 3 \times 10^{31}}{2 \times 10^{11}}$$

$$V = 20\sqrt{2} \times 10^4 \text{ m/s}$$

$$= 2.828 \times 10^5 \text{ m/s}$$

23. $W = nR\Delta T$
 $= \frac{1}{2} \times 8.31 \times 70$
 $= 290.85 \text{ J}$
24. $W = \frac{Q^2}{2c} - \frac{Q^2}{2ck}$
 $= \frac{Q^2}{2c} \left[1 - \frac{1}{k} \right]$
 $= \frac{1}{2} \times 12 \times 100 \text{ pJ} \left(1 - \frac{1}{6.5} \right)$
 $= \frac{12 \times 100 \times 11}{2 \times 13} \text{ pJ} = 507.69 \text{ pJ}$
25. $r_{t=5} = \text{area}$
 $= \left(\frac{1}{2} \times 2 \times 2 + 2 \times 2 + 3 \times 1 \right) \text{ m}$
 $= (2 + 4 + 3) \text{ m}$
 $= 9 \text{ m.}$
26. $\alpha = \frac{\tau}{I}$
 $= \frac{5M_0 g l - 4M_0 g l}{5M_0 l^2 + 2M_0 4l^2}$
 $= \frac{M_0 g l}{13 M_0 l^2}$
 $= \frac{g}{13 l}$
27. $2|\vec{P} + \vec{Q}| = |\vec{P} + 2\vec{Q}|$
 $\Rightarrow 13 + 12 \cos \theta = 10 + 6 \cos \theta$
 $\cos \theta = -\frac{1}{2}$
 $\theta = 120^\circ.$
28. $A\rho g x = F_{\text{restoring}}$
 $\pi r^2 \rho g x = n\omega^2 x$
 $\therefore \omega = \sqrt{\frac{\pi r^2 \rho g}{\rho v}}$
 $= r \sqrt{\frac{\pi g}{v}} = 2.5 \times 10^{-2} \sqrt{\frac{3.14 \times 10}{310 \times 10^{-6}}}$
 $= 2.5 \times 10^{-2} \times 10^2 \sqrt{10}$
 $\omega = 2.5 \times \sqrt{10}$
 $\therefore f = \frac{2.5 \times \sqrt{10}}{2\pi} = 1.25$

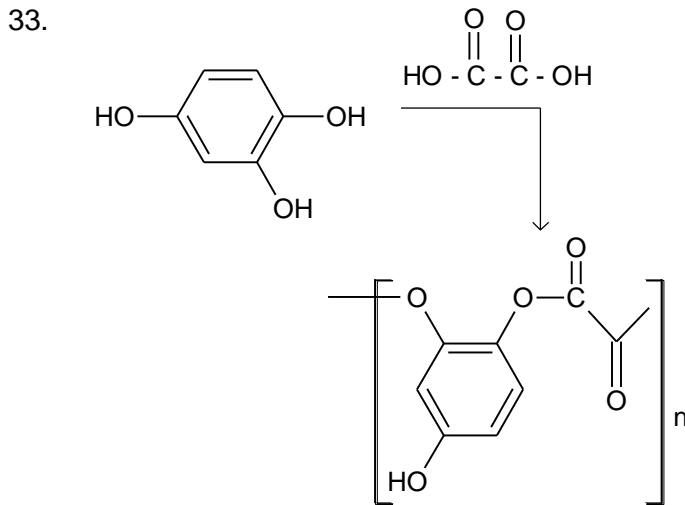
29. $|v_4| = |a_4|$
 $\Rightarrow (w\sqrt{A^2 - x^2})_4 = (w^2x)_4$
 $\Rightarrow w\sqrt{25 - 16} = w^2 \times 4$
 $\Rightarrow w = \frac{3}{4}$
 $T = \frac{2\pi}{w} = 2\pi \frac{4}{3} = \frac{8\pi}{3}$

30. $E = \frac{1}{2} M V_m^2$
 $= \frac{1}{2} \times 2 \times \left(\frac{3P}{\rho} \right)$
 $= \frac{3 \times 4 \times 10^4}{8} = 1.5 \times 10^4 \text{ J}$

PART B – CHEMISTRY

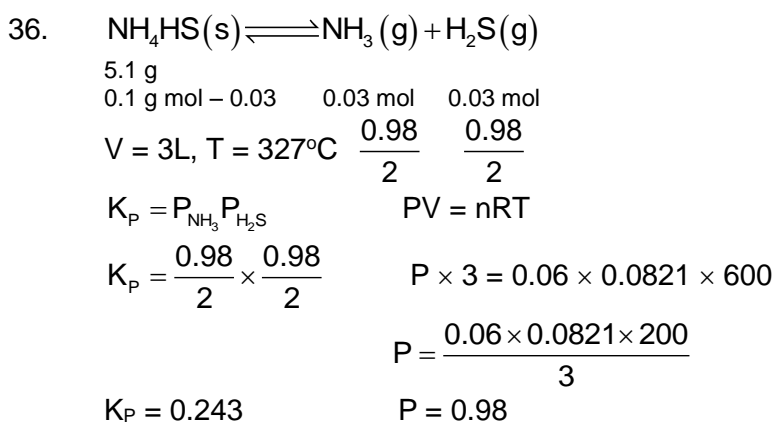
31. $E = -13.6 \frac{n^2}{Z^2} \text{ eV}$
 $E_{\text{He}^+} = -13.6 \frac{4}{9}$

32. Fact based



34. $0.1 = \frac{n_{\text{C}_{12}\text{H}_{22}\text{O}_{11}}}{2}$
 $n_{\text{C}_{12}\text{H}_{22}\text{O}_{11}} = 0.2$
 $\text{Wt}_{\text{C}_{12}\text{H}_{22}\text{O}_{11}} = 0.2 \times 342 = 68.4$

35. First reaction will be requiring a catalyst among halogens oxidizing power decrease down the group.



37. CH₄ is not present in stratosphere.

38. $E = E^\circ - 0.06 \log \frac{[\text{H}^+][\text{Cl}^-]}{[\text{H}_2]^{1/2}}$
 $0.92 = E^\circ - 0.06 \log \frac{10^{-6} \cdot 10^{-6}}{1^{1/2}}$
 $0.92 = E^\circ - 0.06 \log 10^{-12}$
 $E^\circ + 0.06 \times 12$
 $E^\circ = 0.92 - 0.06 \times 12$

$$E^\circ = 0.92 - 0.72$$

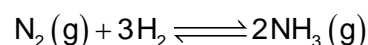
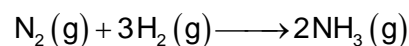
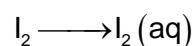


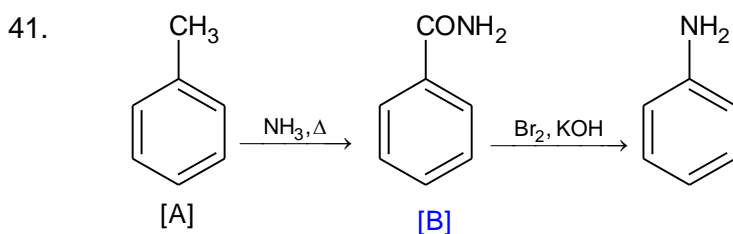
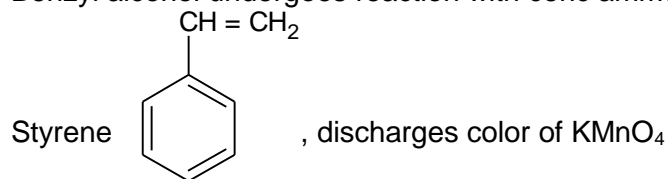
$$E^\circ_{\text{Ag}} / \text{AgCl} = 0.20$$

39. The electron configuration is $[\text{Xe}]4f^{14}5d^16s^2$

40. Lysine is an amino acid ninhydrin test is used for amino acids.

Furfural reacts with 1-naphthol to give violet colouration.

Benzyl alcohol undergoes reaction with ceric ammonium nitrate to give red colouration.



$$\Delta S = 2\Delta S_{\text{NH}_3} - [\Delta S_{\text{N}_2} + 3\Delta S_{\text{H}_2}]$$

There is decrease in number of moles of NH_3 entropy is decreasing.

43. $q = P\Delta V$

$$q = 16$$

$$C_P = 24$$

$$C_P = \frac{qP}{\Delta T}$$

$$\Delta T = \frac{16}{24} \text{K} = \frac{2}{3} \text{K}$$

44. $\Delta T_b = K_b m$

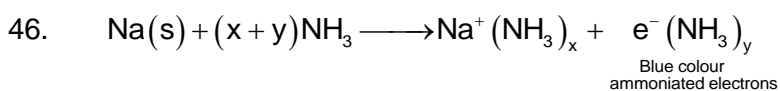
$$\Delta T_b = K_b \times 1 \Rightarrow 2 = K_b$$

$$\Delta T_f = K_f m$$

$$2 = 2K_f = K_f$$

$$\frac{K_f}{K_b} = \frac{1}{2}$$

45. NaBH_4 reduces both carbonyl group and imine.



47.
$$\frac{1}{2} \frac{d[A]}{dt} = -K_1[A]_2 + K_{-1}[A]^2$$

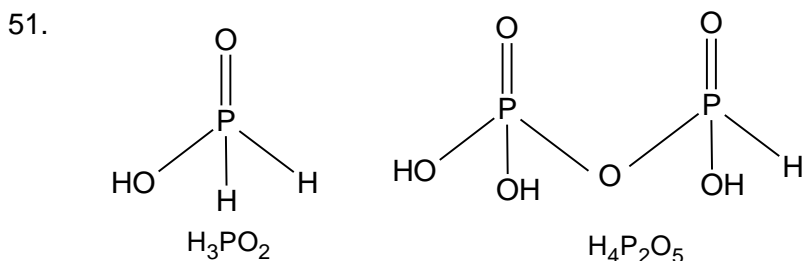
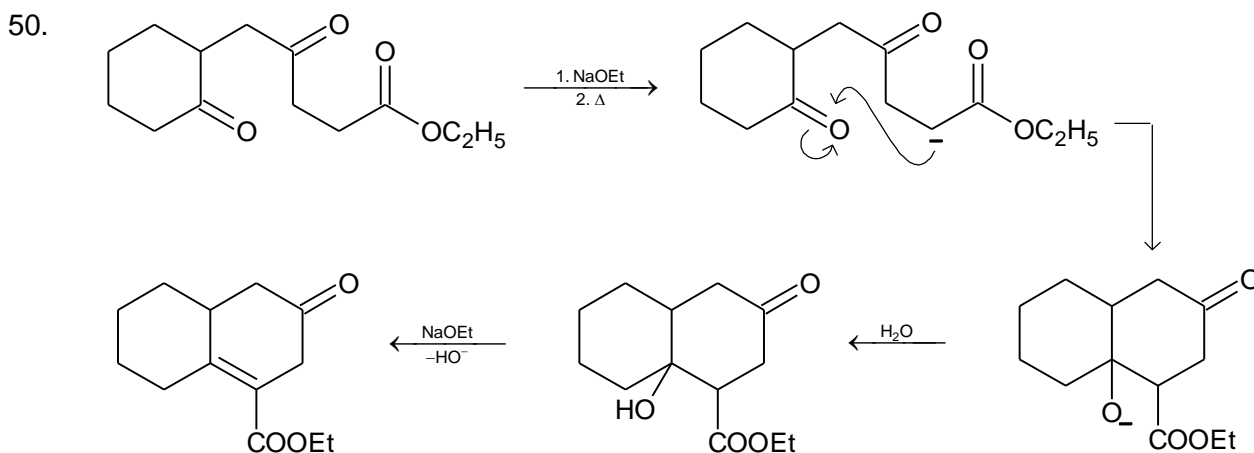
$$\frac{d[A]}{dt} = 2K_1[A]_2 - 2K_{-1}[A]^2$$

48. Barfoed test is used to detect monosaccharides.

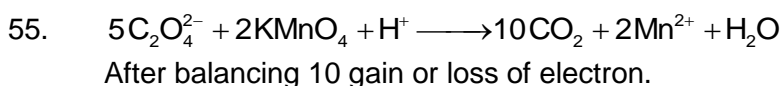
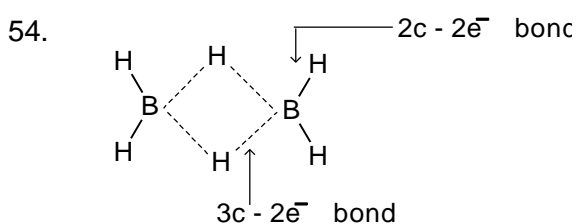
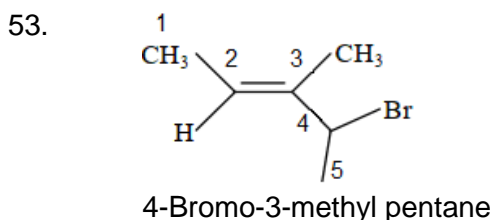
49. Co^{2+} high spin $t_{2g}^5 e_g^2$ '3' unpaired electrons

Co^{2+} low spin $t_{2g}^6 e_g^1$ '1' unpaired electron

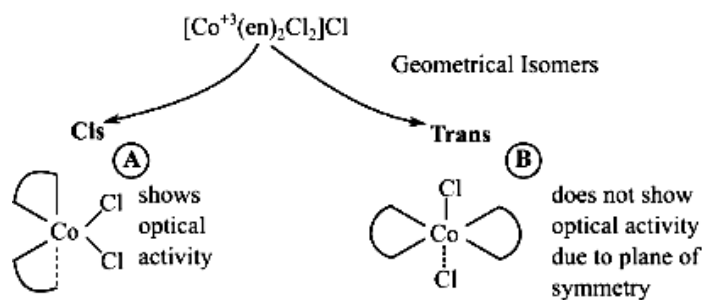
Difference is $3 - 1 = 2$



52. Iodoform reaction can be used for this transformation.



56. Cobalt(III) chloride on reaction with ethylenediamine in ratio 1 : 2 2 isomeric products complexes *A* and *B*



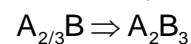
57. $[\text{Au}(\text{CN}_2)]^-$ and $[\text{Ag}(\text{CN})_2]^-$ both are soluble complexes.

58. Formula of the compounds

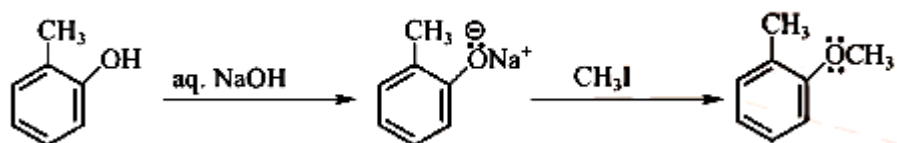
No. of octahedral voids are equal to the number of atoms forming lattice

A occupy octahedral void i.e. $\frac{2}{3}$ of them

B forms crystal lattice



- 59.



60. 'EAS' first ring is activated and second is deactivated NO_2^+ attack at para position of activated ring.

PART C – MATHEMATICS

61. $\alpha^2 + \beta^2 = (\alpha + \beta)^2 - 2\alpha\beta$
 $= (3 - \lambda)^2 - 2(2 - \lambda)$
 $= \lambda^2 + 9 - 6\lambda - 4 + 2\lambda$
 $= \lambda^2 - 4\lambda + 5$
 \therefore For least value $\lambda = 2$

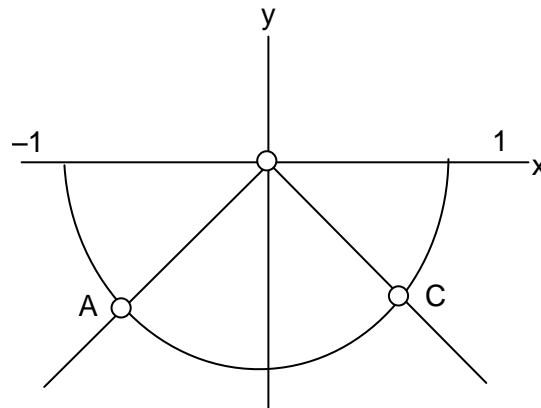
62. Using formula $\frac{\sin 2^n A}{2^n \sin A} = \cos A \cos 2A \cos 2^2 A \dots \dots \dots \cos 2^{n-1} A$

63. $x^2 dx + 2xy dy - y^2 dx = 0$
 $x^2 dx = y^2 dx - 2xy dy$
 $(x^2 - y^2) dx + 2xy dy = 0$
 $dx = -\left(\frac{x \cdot 2y dy - y^2 dx}{x^2}\right)$

Integrals

$x = -\frac{y^2}{x} + c$
 $x^2 + y^2 = cx$

64. A, B, C are sharp edges



65. $x^2 \left(\sqrt{x} + \frac{\lambda}{x^2}\right)^{10}$
 Consider constant term
 ${}^{10}C_r (\sqrt{x})^{10-r} \left(\frac{\lambda}{x^2}\right)^r$
 $\frac{10-r}{2} - 2r = 0$
 $10 - 5r = 0$
 $r = 2$
 $\Rightarrow {}^{10}C_2 \times \lambda^2 = 720 \Rightarrow \lambda = 4$

66. $y = xe^{x^2}$
 (1, e) lies on this
 Now $\frac{dy}{dx} = xe^{x^2} \cdot 2x + e^{x^2} \cdot 1$
 Put $x = 1$
 $m = 2e + e = 3e$
 Equation of tangent at (1, e)

$$y - e = 3e(x - 1)$$

$$y - e = 3ex - 3e$$

$$y = 3ex - 2e$$

$\left(\frac{4}{3}, 2e\right)$ satisfies it

\therefore Answer is B

67. $\left. \begin{array}{l} f(g(1)) = 1 \\ f(g(2)) = 1 \end{array} \right\}$ Many one

$$f(g(2k)) = k$$

$$f(g(2k+1)) = k+1$$

\therefore Onto

68. $\begin{vmatrix} \sin 3\theta & -1 & 1 \\ \cos 2\theta & 4 & 3 \\ 2 & 7 & 7 \end{vmatrix} = 0$

$$7 \sin 3\theta + 14 \cos 2\theta - 14 = 0$$

$$\sin 3\theta + 2 \cos 2\theta - 2 = 0, \sin \theta = \frac{1}{2}$$

69. $\vec{\alpha} = (\lambda - 2)\vec{a} + \vec{b}$

$$\vec{\beta} = (4\lambda - 2)\vec{a} + 3\vec{b}$$

$\vec{\alpha}$ and $\vec{\beta}$ are collinear

$$\begin{vmatrix} \lambda - 2 & 1 \\ 4\lambda - 2 & 3 \end{vmatrix} = 0$$

$$3\lambda - 6 - 4\lambda + 2 = 0$$

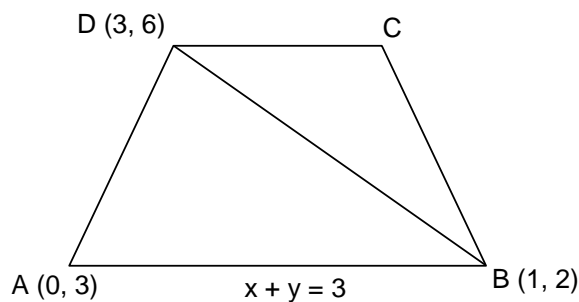
$$-\lambda - 4 = 0$$

$$\lambda = -4$$

70. Intersection point is A (0, 3)

$$M = (4, 6)$$

$$B \Rightarrow (1, 2), D \rightarrow (3, 6)$$



71. Differentiability we get $f(x) = 2x - x^2 f'(x)$

$$f(x) = \frac{2x}{1+x^2} \Rightarrow f''(x) = 2 \frac{(1-x^2)}{(1+x^2)^2}$$

$$f'\left(\frac{1}{2}\right) = \frac{24}{25}$$

$$72. \left(\frac{\sqrt{3}}{2} + \frac{i}{2}\right)^5 = \left(e^{i\frac{\pi}{6}}\right)^5 = e^{i5\pi/6}$$

$$\therefore z = 2\cos\frac{5\pi}{6} = 2\left(-\frac{\sqrt{3}}{2}\right) = -\sqrt{3}$$

$$73. 1 - \left(\frac{2}{3}\right)^n > \frac{5}{6}$$

$$\left(\frac{2}{3}\right)^n < \frac{1}{6}$$

$$\Rightarrow n = 5$$

$$74. \int x^5 \cdot e^{-4x^3} dx$$

$$= \int x^2 \cdot x^3 e^{-4x^3} dx$$

$$-4x^3 = t$$

$$-12x^2 dx = dt$$

$$= \frac{-1}{12} \int -\frac{t}{4} e^t dt$$

$$= \frac{1}{48} \int t e^t dt$$

$$= \frac{1}{48} t e^t - 1 \cdot e^t + c$$

$$= \frac{1}{48} e^{-4x^3} \cdot (-4x^3) - e^{-4x^3} + c$$

$$75. r = \sqrt{25 + 36 - c} = \sqrt{36}$$

$$c = 25$$

76. P is True
Q is False
R is True
 $\therefore \sim Q$ is True
 $\sim Q \wedge R$ is True
 $\therefore P \vee (\sim Q \wedge R)$ is True.

$$77. x = \sqrt{2}y - 4\sqrt{2}$$

$$x^2 = 4y$$

Solving we get point of intersection
 $A(-2\sqrt{2}, 2), B(4\sqrt{2}, 8)$

$$\therefore AB = \sqrt{(6\sqrt{2})^2 + 6^2} = 6\sqrt{3}$$

$$78. \text{Det } A = b^2 + 3$$

$$\frac{\det A}{b} = b + \frac{3}{b}$$

$$\therefore \text{Least value} = 2\sqrt{3}$$

$$79. \quad \frac{y^2}{1+r} - \frac{x^2}{1-r} = 1$$

$r > 1 \Rightarrow$ ellipse

$$e = \sqrt{1 - \left(\frac{r-1}{r+1}\right)^2} = \sqrt{\frac{2}{r+1}}$$

$$80. \quad \sum_{r=1}^{25} \frac{|50}{r|50-r} \times \frac{|50-r}{|25-r|25}$$

$$= \sum_{r=1}^{25} \frac{|50}{r|25-r|25}$$

$$= \frac{|50}{25} \sum_{r=1}^{25} \frac{1}{r|25-r|}$$

$$= \frac{|50}{25|25} \sum_{r=1}^{25} {}^{25}C_r = {}^{50}C_{25} (2^{25} - 1)$$

81. A (-3, 3, 4), B (3, 7, 6)

Mid point \Rightarrow (0, 2, 5)

$$\vec{n} = \vec{AB} = 6\hat{i} + 10\hat{j} + 2\hat{k}$$

Equation of plane $\vec{r} \cdot \vec{n} = \vec{a} \cdot \vec{n}$

$$\vec{r} \cdot (6\hat{i} + 10\hat{j} + 2\hat{k}) = (0\hat{i} + 2\hat{j} + 5\hat{k}) \cdot (6\hat{i} + 10\hat{j} + 2\hat{k})$$

$$3x + 5y + z = 15$$

(4, 1, -2) satisfies it

\therefore Answer is D

$$82. \quad \cot \left[\sum_{n=1}^{19} \cot^{-1} \left(1 + \sum_{p=1}^n 2p \right) \right]$$

$$= \cot \left[\sum_{n=1}^{19} \cot^{-1} (1 + n^2 + n) \right]$$

$$= \cot \left[\sum_{n=1}^{19} \tan^{-1} \left(\frac{1}{1 + n^2 + n} \right) \right]$$

$$= \cot \left[\sum_{n=1}^{19} \tan^{-1} (n+1) - \tan^{-1} 1 \right]$$

$$= \cot \left[\tan^{-1} 20 - \tan^{-1} 1 \right]$$

$$= \cot \left(\tan^{-1} \frac{19}{21} \right)$$

$$\Rightarrow \frac{21}{19}$$

83. $\sum x = 50$

$$(3)^2 = \frac{1}{5} \left(ex^2 - \frac{(ex)^2}{5} \right)$$

$$9 = \frac{1}{5} \left(\sum x^2 - \frac{2500}{5} \right)$$

$$\therefore \sum x^2 = 545$$

$$\text{New variable} = \frac{1}{6} \left(3045 - \frac{0}{6} \right) = 507.5$$

84. $f'(x) = 7 - \frac{3}{4} \cdot \frac{f(x)}{x}, x > 0$
 $\therefore f'(x) + \frac{3}{4x} f(x) = 7$ (Linear)

$$f(x) \cdot e^{\int \frac{3}{4x} dx} = \int 7 \cdot e^{\int \frac{3}{4x} dx} + c$$

$$f(x) \cdot x^{3/4} = \int 7 \cdot x^{3/4} + c$$

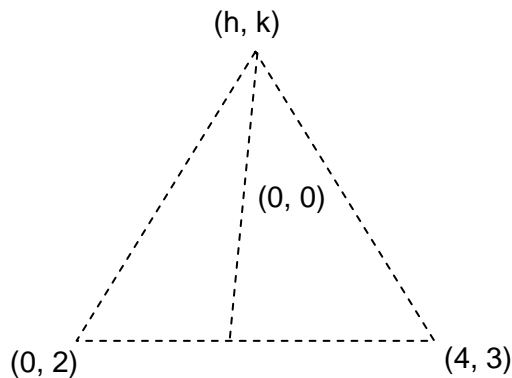
$$= 7 \frac{x^{7/4}}{\frac{7}{4}} + c$$

$$\therefore f(x) = 4x + cx^{-3/4}$$

$$\therefore f\left(\frac{1}{x}\right) = \frac{4}{x} + cx^{3/4}$$

$$\therefore \lim_{x \rightarrow 0^+} x f\left(\frac{1}{x}\right) = \lim_{x \rightarrow 0^+} 4 + cx^{7/4} = 4$$

85. $\frac{k-3}{h-4} = 0 \quad k = 3$
 $\frac{k}{h} = -\frac{4-0}{3-2} \quad -4h = k$
 $h = \frac{-3}{4}$



86. $\int_{-\pi/2}^{\pi/2} \frac{dx}{[x] + [\sin x] + 4}$
 $= \int_{-\pi/2}^0 \frac{dx}{[x] + -1 + 4} + \int_0^{\pi/2} \frac{dx}{[x] + 4}$
 $= \int_{-\pi/2}^{-1} \frac{dx}{-2 - 1 + 4} + \int_{-1}^0 \frac{dx}{-1 - 1 + 4} + \int_0^1 \frac{dx}{4} + \int_1^{\pi/2} \frac{dx}{1 + 4}$
 $= -1 + \frac{\pi}{2} + 2 + \frac{1}{4} + \frac{1}{5} \left(\frac{\pi}{2} - 1 \right)$
 $= 3 \frac{\pi}{5} - \frac{9}{20}$

87. Put $(2\lambda + 4, 2\lambda + 5, \lambda + 3)$ in $x + y + z = 2$
 $2\lambda + 4 + 2\lambda + 5 + \lambda + 3 = 2$
 $5\lambda = -10 \quad \lambda = -2$
 $P(0, 1, 1)$
 Now put in options
 Answer is C

88. For any value of r determinant is zero.

89. $a = \sqrt{3} + 1$

$b = \sqrt{3} - 1$

$$\frac{\sin A}{\sin B} = \frac{\sqrt{3} + 1}{\sqrt{3} - 1} = \frac{3 + 1 + 2\sqrt{3}}{2} = 2 + \sqrt{3}$$

$$\frac{\sin A}{\sin(120 - A)} = \sqrt{3} + 2$$

$$\frac{\sin A}{\sin 12 \cos A - \cos 12 \sin A} = \sqrt{3} + 2$$

$$\frac{1}{\frac{\sqrt{3}}{2} \cot A + \frac{1}{2}} = \sqrt{3} + 2$$

$$\frac{\sqrt{3} \cot A + 1}{2} = \frac{1}{\sqrt{3} + 2}$$

$$= \frac{\sqrt{3} - 2}{-1}$$

$$\frac{\sqrt{3} \cot A + 1}{2} = -\sqrt{3} + 2$$

$$\sqrt{3} \cot A = 4 - 2\sqrt{3} - 1$$

$$\sqrt{3} \cot A = 3 - 2\sqrt{3}$$

$$\cot A = \sqrt{3} - 2$$

$$-\cot A = 2 - \sqrt{3} = \tan 15^\circ$$

$$\therefore A = 105^\circ$$

$$\therefore B = 15^\circ$$

90. $y = x^{3/2} - 2$ $\frac{dy}{dx} = \frac{3}{2}\sqrt{x}$

Slope of normal = $-\frac{2}{3\sqrt{x}}$

Let point is $(x_1, x_1^{3/2} - 2)$

$$\therefore \text{Normal } y - (x_1^{3/2} - 2) = \frac{-2}{3\sqrt{x_1}}(x - x_1)$$

Now put (1, 7) and solve it.

$$\Rightarrow x_1 = \frac{1}{3}$$

$$\therefore P \Rightarrow \left(\frac{1}{3}, 7 + \frac{1}{3\sqrt{3}}\right), A \Rightarrow (1, 7)$$

$$\therefore AD = \frac{1}{6}\sqrt{\frac{7}{3}}$$